



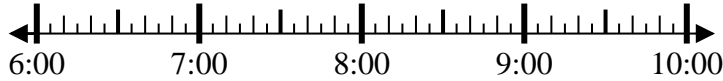
Solve each problem.

Answers

1) Start: _____

Elapsed: 1 hr & 40 mins

End: 7:45

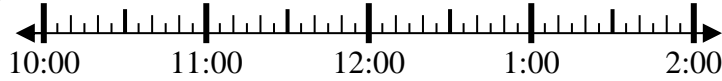


1. _____

2) Start: _____

Elapsed: 1 hr & 40 mins

End: 11:40

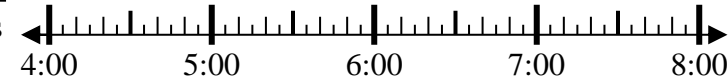


2. _____

3) Start: _____

Elapsed: 2 hrs & 30 mins

End: 6:55



3. _____

4) Start: _____

Elapsed: 1 hr & 20 mins

End: 9:00

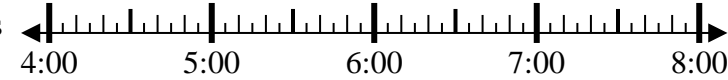


4. _____

5) Start: _____

Elapsed: 2 hrs & 30 mins

End: 6:40



5. _____

6) Start: _____

Elapsed: 1 hr & 45 mins

End: 4:15

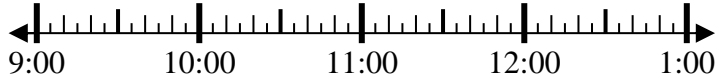


6. _____

7) Start: _____

Elapsed: 1 hr & 45 mins

End: 11:15



7. _____

8) Start: _____

Elapsed: 1 hr & 45 mins

End: 8:35



8. _____



Solve each problem.

1) Start: 6:05
 Elapsed: 1 hr & 40 mins
 End: 7:45



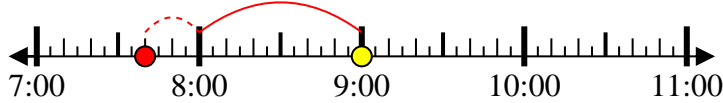
2) Start: 10:00
 Elapsed: 1 hr & 40 mins
 End: 11:40



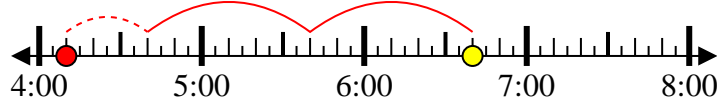
3) Start: 4:25
 Elapsed: 2 hrs & 30 mins
 End: 6:55



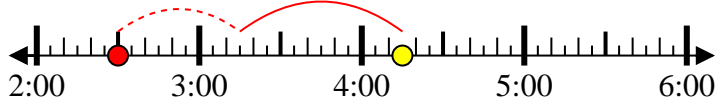
4) Start: 7:40
 Elapsed: 1 hr & 20 mins
 End: 9:00



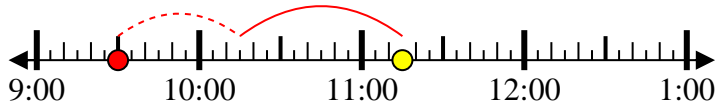
5) Start: 4:10
 Elapsed: 2 hrs & 30 mins
 End: 6:40



6) Start: 2:30
 Elapsed: 1 hr & 45 mins
 End: 4:15



7) Start: 9:30
 Elapsed: 1 hr & 45 mins
 End: 11:15



8) Start: 6:50
 Elapsed: 1 hr & 45 mins
 End: 8:35



Answers

1. 6:05

2. 10:00

3. 4:25

4. 7:40

5. 4:10

6. 2:30

7. 9:30

8. 6:50